



DIRECTIONS: (A) Identify the structures and (B) describe their purposes.




I.

A. _____
 B. _____



III.

A. _____
 B. _____



II.

A. _____
 B. _____

Fill in the blanks with the correct words from the list provided.

- | | | | | |
|-------------|---------------|-----------|--------|----------|
| decorations | engineers | Pantheon | vaults | concrete |
| 45,000 | city planners | Colosseum | domes | brick |
| 75,000 | proportions | aqueducts | arch | roads |

1. The Roman architectural style was based on the _____, _____ and _____.
2. All Roman innovations in building were due to the development of _____ that did not buckle under stress.
3. _____ connected cities of the Empire.
4. _____ is the masterpiece of Roman architecture.
5. The basic ingredients of Roman buildings are _____ and _____.
6. _____ were used to carry water from the hills to the cities.
7. The _____ was the most imposing structure built in Rome.
8. This structure seated _____ persons.
9. Roman _____ laid out towns supplied with elaborate systems of sewers.
10. Roman bridges are among the best ever built because they possess superb _____.